

Unit 12 Study Guide

Name Answer Key

Date _____

1. Roberto earns \$3 per hour babysitting. How much does he earn in 5 hours?
You may create a rate table to help you. $\$3 \times 5 \text{ hrs} = \15

2. A box of 8 pieces of chalk costs 62 cents. What is the cost of 1 piece of chalk?
You may create a rate table to help you. $62¢ \div 8 = 0.0775$ or 0.08

$$\begin{array}{r} 0.0775 \\ 8 \overline{) 0.6200} \\ \underline{00} \\ 62 \\ \underline{56} \\ 60 \\ \underline{56} \\ 40 \\ \underline{40} \\ 0 \end{array}$$

3. The Devis family drove 295 miles to visit relatives. It took 5 hours. At that rate, how many miles had the Devises driven in 3 hours? Fill in the table.

Hours	1	2	3	4	5
Miles	59	118	177	236	295

$3 \text{ hours} = 177 \text{ miles}$

$$\begin{array}{r} 59 \text{ miles} \\ 5 \overline{) 295} \\ \underline{25} \\ 45 \\ \underline{45} \\ 0 \end{array}$$

4. Roberto earns \$3 per hour babysitting. How much does he earn in 5 hours?
You may create a rate table to help you. $\$3 \times 5 \text{ hrs} = \15

5. Shawna works 3 hours a day, 5 days a week. She earns \$48.00 per day.
a. How much does she earn per hour? $\$48 \div 3 = \16 per hour
b. How much does she earn per week? $\$16 \times 5 \text{ days} = \80

6. List the factor pairs of 12.

1 and 12, 2 and 6, 3 and 4

7. Name all the factors of 28. 1, 2, 4, 7, 14, 28

8. Name all the factors of 32. 1, 2, 4, 8, 16, 32

9. Name all the factors of 84. 1, 2, 3, 4, 6, 7, 12, 14, 21, 28, 42, 84

10. Name all the factors of 66. 1, 2, 3, 6, 11, 22, 33, 66

Name _____

Date _____

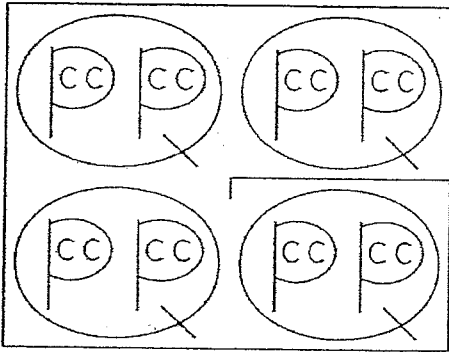
11. Compare. Write $<$, $>$, or $=$ for the \bigcirc .

$$-45 \bigcirc -65$$

12. Write the following set of numbers in order from largest to smallest.

0.09, -13, -0.001, -2.3, 1.2, 0.01 -2.3, -1.3, -0.001, 0.01, 0.09, 1.2

13. Use the diagram to help you solve the problems.



a. 32 c = 2 gal

b. 22 qt = 5 gal 2 qt

c. 10 c = 2 qt 2 c

d. 15 pt = 7 qt 1 pt

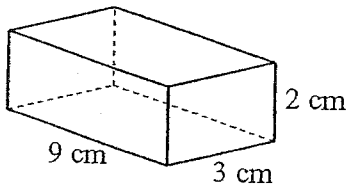
e. 3 qt = 12 c

Name _____

Date _____

14. Calculate the volume of each rectangular prism.

a.

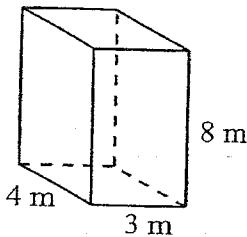


$$V = L * W * H$$

$$V = 9 * 3 * 2 = 54 \text{ cm}^2$$

$$V = 54 \text{ cm}^3$$

b.



$$V = 4 * 3 * 8 = 96 \text{ m}^3$$

$$V = 96 \text{ m}^3$$

15. Solve the open sentence.

$$642.123 + 123.230 = d$$

$$d = 765.353$$

$$\begin{array}{r} 642.123 \\ + 123.230 \\ \hline 765.353 \end{array}$$

16. Find the solution of each open sentence.

$$26.69 = 12.15 + x$$

$$x = 14.54$$

$$\begin{array}{r} 26.69 \\ - 12.15 \\ \hline 14.54 \end{array}$$

17. Solve the open sentence.

$$94.658 - 92.801 = d$$

$$d = 1.857$$

$$\begin{array}{r} ^3 94.658 \\ - 92.801 \\ \hline 1.857 \end{array}$$

18. Solve.

$$m - 26.6 = 27.1$$

$$m = 53.7$$

$$\begin{array}{r} 26.6 \\ + 27.1 \\ \hline 53.7 \end{array}$$

19. Write the set of fractions in order from smallest to largest.

$$-\frac{1}{14}, \frac{4}{14}, \frac{2}{14}, -\frac{7}{14}, \frac{9}{14}$$

$$-\frac{7}{14}, -\frac{1}{14}, \frac{2}{14}, \frac{4}{14}, \frac{9}{14}$$

Order the fractions from smallest to largest.

20. $\frac{1}{6}, -\frac{3}{4}, \frac{14}{24}, -\frac{12}{19}, \frac{5}{8}$

$$-\frac{3}{4}, -\frac{12}{19}, \frac{1}{6}, \frac{14}{24}, \frac{5}{8}$$

Name _____

Date _____

Order the fractions from smallest to largest.

21. $-\frac{3}{9}, -\frac{4}{32}, \frac{9}{11}, \frac{5}{7}, \frac{2}{14}$ $-\frac{3}{9}, -\frac{4}{32}, \frac{2}{14}, \frac{5}{7}, \frac{9}{11}$


22. $\frac{2}{8}, \frac{13}{26}, -\frac{5}{10}, \frac{2}{6}, -\frac{11}{33}$ $-\frac{5}{10}, -\frac{11}{33}, \frac{2}{8}, \frac{2}{6}, \frac{13}{26}$

23. $\frac{3}{18}, -\frac{9}{81}, -\frac{4}{16}, \frac{1}{5}, \frac{15}{45}$ $-\frac{4}{16}, -\frac{9}{81}, \frac{3}{18}, \frac{1}{5}, \frac{15}{45}$

24. There are 3 schools in Somertown. Each school has 239 students. A friend estimates there are 1,200 students at all three schools. Is this reasonable? Explain. \rightarrow estimate ~ 200 students
 $200 + 200 + 200 = 600$ $1,200$ is not reasonable.
 or $200 \times 3 \text{ schools} = 600$

25. Katie is buying a package of erasers at a store. The store sells packages of 23 erasers for \$2.30 and 28 erasers for \$1.96. Which package offers the better buy? Explain. \rightarrow The package of 28 erasers is cheaper. (3¢ per eraser cheap)
 $\$2.30 \div 23 \text{ erasers} = \0.10 $\$1.96 \div 28 = \0.07

26. Use the sign below to solve the problem. Explain how you found your answer.



① $30¢ \times 50 = \$15.00$

② $1.60 \times 8 = \$12.80 + 60¢ = \13.40
 (for 6) (for 2 more donuts)

③ $\$3.20 \times 4 = \$12.80 + 60¢ = \$13.40$
 (a dozen) (2 more donuts)

Joey goes to Doreen's Delicious Doughnuts to buy doughnuts for the class party. What is the least amount of money he will have to pay for 50 doughnuts? Explain.

$\$13.40$ is the least amount of money... if you buy
 4 dozen donuts ^{at \$3.20} plus 2 extra donuts at 30¢. Or 8 boxes of 6
 donuts for \$1.60 plus 2 extra donuts at 30¢.