

Name: _____

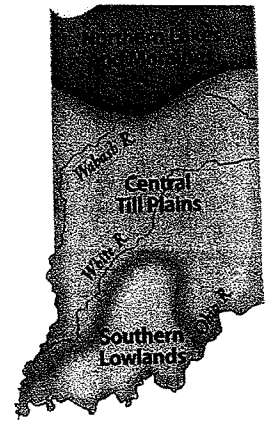
Date: _____ # _____

Unit 1 Indiana History Study Guide

Completion

Complete each statement.

Complete each sentence with the correct word from the box.



culture	immigrant	urban	Great Migration
glacier	moraine	continent	region
			geography

- _____ is the way of life shared by a group of people, including their language, beliefs, music, food, and holiday traditions.
- Giant sheets of ice that move slowly across the land are called _____.
- An area of land with common features such as landforms and resources is called a _____.
- _____ areas are cities and their surroundings.
- A person who moves to a new country to live is called an _____.
- _____ is the study of Earth and the way people live on it.
- The time in history when many African Americans moved north to find jobs is known as the _____.
- A great body of land on the Earth is called a _____.
- A _____ is a line of low hills formed by rocks that are pushed up by glaciers.

"Indiana's Land and People"



Name: _____


Complete each sentence with the correct word from the box.

economy	environment	renewable resource	manufacturing
agriculture	lake effect	limestone	nonrenewable resource

10. A soft rock that is crushed and then used to make roadways and buildings is called _____.
11. The _____ is a change in the weather when large bodies of water are near land.
12. A _____ is a natural material that can be replaced.
13. The _____ is the surroundings in which we live on Earth.
14. A _____ is a natural material of which there is a limited supply.
15. _____ is the making of goods by machinery.
16. _____ is the business of growing crops and raising animals.
17. The way a place uses and produces natural resources, goods, and services is its _____.



Name: _____



Multiple Choice

Identify the choice that best completes the statement or answers the question.

- ____ 18. Most coal mined in Indiana is used to produce ____.
- a. charcoal
 - b. fertilizer
 - c. electricity
 - d. diamonds
- ____ 19. Coal, natural gas, and petroleum are examples of ____.
- a. fuels found in limestone
 - b. nonrenewable resources
 - c. minerals
 - d. renewable resources
- ____ 20. Teachers, salespeople, and police officers are people who work in ____.
- a. agriculture
 - b. the service industry
 - c. pharmaceuticals
 - d. manufacturing
- ____ 21. Some examples of renewable resources are ____.
- a. coal, natural gas, and petroleum
 - b. steel, aluminum, and limestone
 - c. minerals
 - d. water, forests, and soil
- ____ 22. What has a great effect on the temperature and climate of an area? ____
- a. the length of the equator
 - b. its distance from the equator
 - c. its strong winds
 - d. its precipitation
- ____ 23. What is the result of the lake effect on an area? ____
- a. warmer temperatures
 - b. very dry summers
 - c. tornadoes
 - d. heavy snowfalls
- ____ 24. The distance between an area and the ____ has a big effect on the area's climate and temperature.
- a. landform
 - b. precipitation
 - c. equator
 - d. tornado



Name: _____

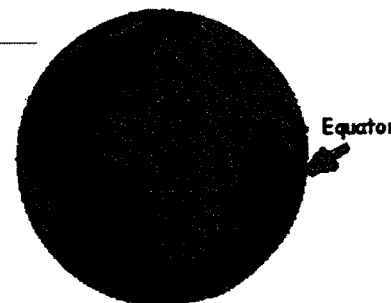


- _____ 25. **Indiana has one of the largest groups of _____ in the country.**
- a. Amish
 - b. Swiss immigrants
 - c. Native Americans
 - d. African Americans
- _____ 26. **The first Europeans to come to Indiana were French _____.**
- a. soldiers
 - b. gold miners
 - c. explorers and fur traders
 - d. religious groups
- _____ 27. **What does the International Festival in Indianapolis celebrate every November? _____**
- a. harvest seasons around the world
 - b. Indiana's great artists, writers, musicians, and athletes
 - c. Hoosier heritage and our state's many cultures
 - d. the state's strong tractor industry
- _____ 28. **Minerals are natural substances found on Earth that come from _____.**
- a. soil
 - b. steel or aluminum
 - c. manufacturing plants
 - d. plants and animals
- _____ 29. **Which of the following is one of the most important crops for Indiana farmers? _____**
- a. rice
 - b. tomatoes
 - c. green vegetables
 - d. corn

Essay

climate	temperature	lake effect	precipitation	tornado
---------	-------------	-------------	---------------	---------

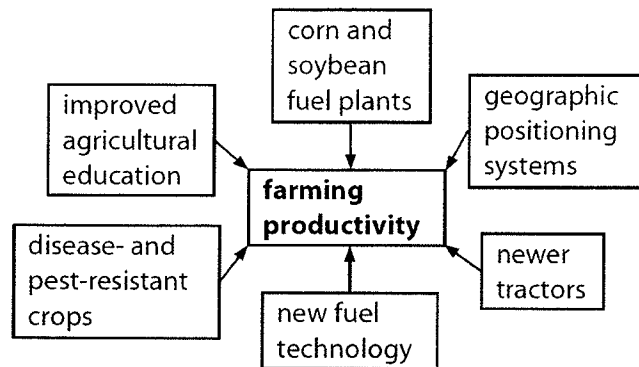
30. Describe the climate in your region of Indiana using **three** of the vocabulary words above.



Name: _____

Short Answer

31. Describe how the distance from the area where you live to the equator affects your local climate.



32. Look at the chart. Choose how one invention or improvement from the chart above helped the farming industry in Indiana.

