


Name _____ # _____



Date _____

Math Boxes Unit 7 Review

1. Add or Subtract.
Use pattern blocks to help you.

1. $2/6 + 5/6 =$ _____

2. $2/3 + 1/6 =$ _____

3. $6/8 - 2/8 =$ _____

4. $4/6 - 3/6 =$ _____




2. Which fraction is **larger**:

$4/5$ or $8/9$? _____

Draw a picture to help you compare.

Explain how you know.

3. $77 * 56 =$ _____




Use pattern blocks to help solve the following problems.



4. If the **red trapezoid** is the whole, what fraction of the whole is:

a. 1 green triangle? _____ b. 2 green triangles? _____

c. 1 blue rhombus? _____



5. Suppose the **green triangle** is $1/2$ of the whole. Which pattern block is
a. a whole? _____